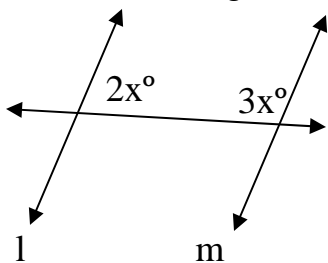


Unit 3 Transversal Practice C

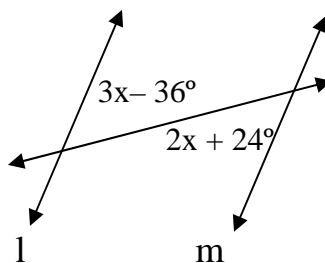
Standards: 7.0

Holt: 3.2 Transversals p. 155

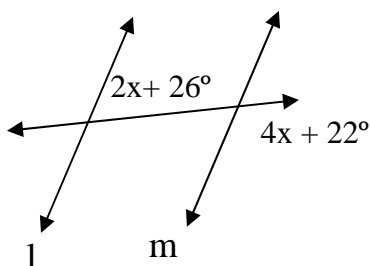
- 1 Assume that line l and m are parallel.
Find each angle measure.



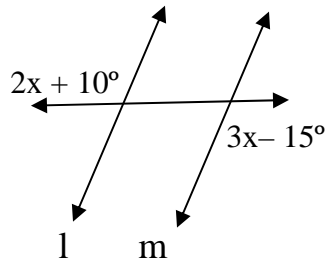
- 2 Assume that line l and m are parallel.
Find each angle measure.



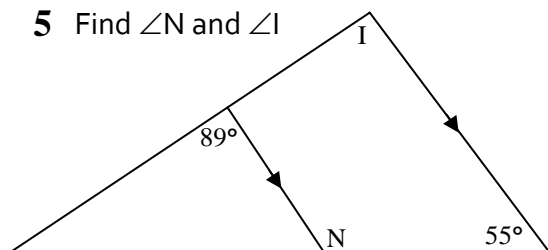
- 3 Assume that line l and m are parallel.
Find each angle measure.



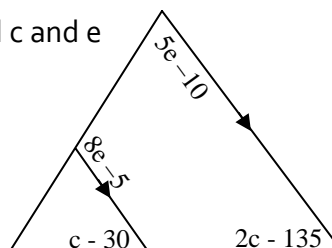
- 4 Assume that line l and m are parallel.
Find each angle measure.



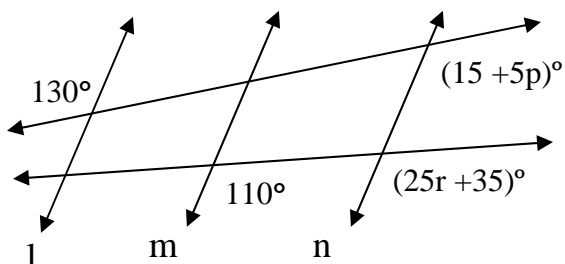
- 5 Find $\angle N$ and $\angle I$



- 6 Find c and e



- 7 Assume that line l , m , and n are parallel.
Solve for p and r .



- 8 Assume that line l , m , and n are parallel.
Solve for c and g .

