

Geometry

Unit 3 Transversal Practice A

Name:

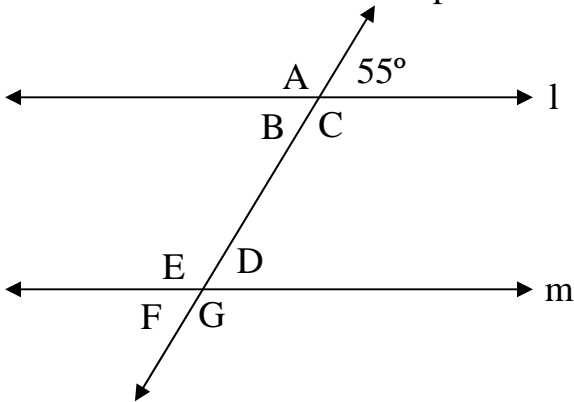
Date:

Period: 1 2 3 4 5 6

Standards: 7.0

Holt: 3.1 Transversals p. 147

1 Assume that line l and m are parallel.



Measure of A

Measure of B

Measure of C

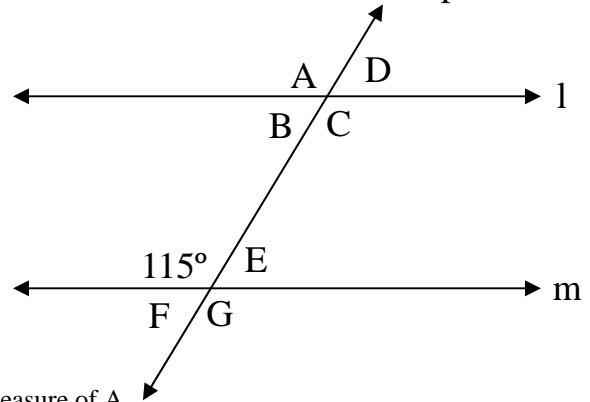
Measure of D

Measure of E

Measure of F

Measure of G

2 Assume that line l and m are parallel.



Measure of A

Measure of B

Measure of C

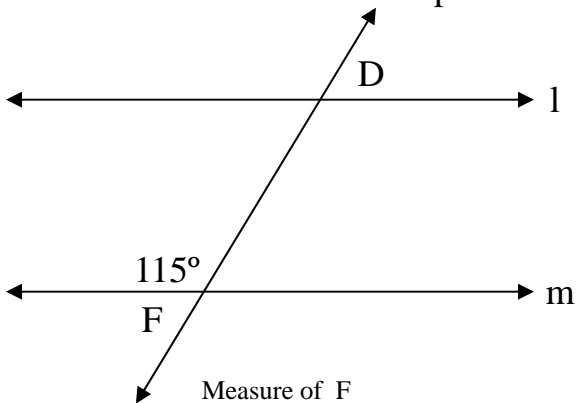
Measure of D

Measure of E

Measure of F

Measure of G

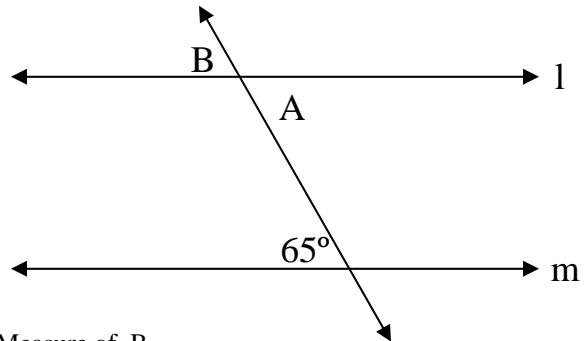
3 Assume that line l and m are parallel.



Measure of F

Measure of D

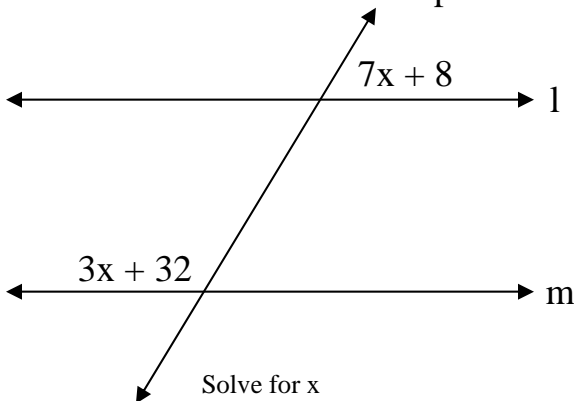
4 Assume that line l and m are parallel.



Measure of B

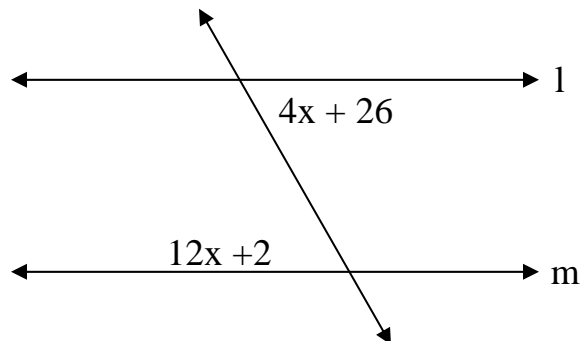
Measure of A

5 Assume that line l and m are parallel.



Solve for x

6 Assume that line l and m are parallel.



Solve for x