

# Geometry

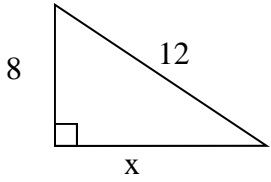
## Unit 7 Practice A

Name:

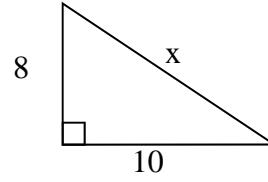
Date:

Per: 1 2 3 4 5 6

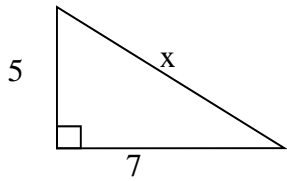
1) Solve for x



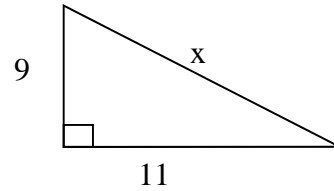
2) Solve for x



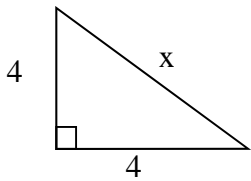
3) Solve for x



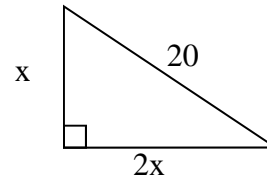
4) Solve for x



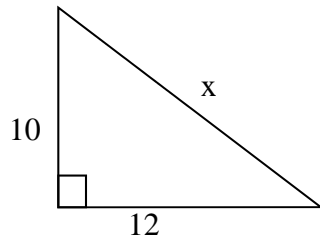
5) Solve for x



6) Solve for x



7) Solve for x



8) Solve for x

