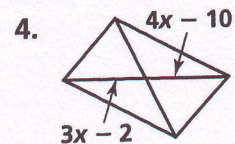
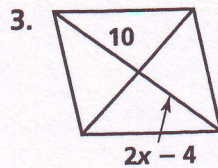

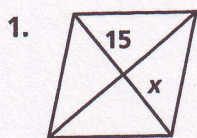


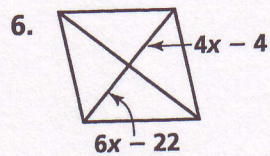
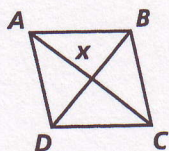
Geometry

Unit 6 Practice E

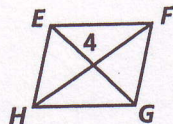
Find the value of x in each parallelogram.



5. $AC = 24$



7. $x = EG$



8. $IK = 35$

