

Geometry

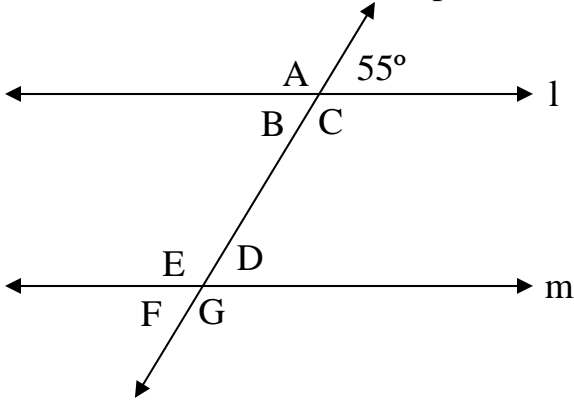
Ch 3 Transversal Practice A

Name:

Date:

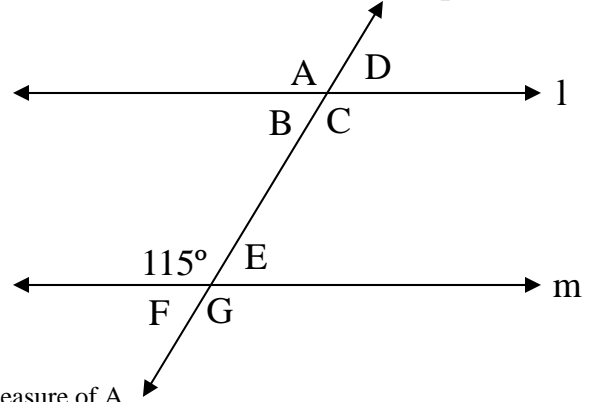
Period:

1 Assume that line l and m are parallel.



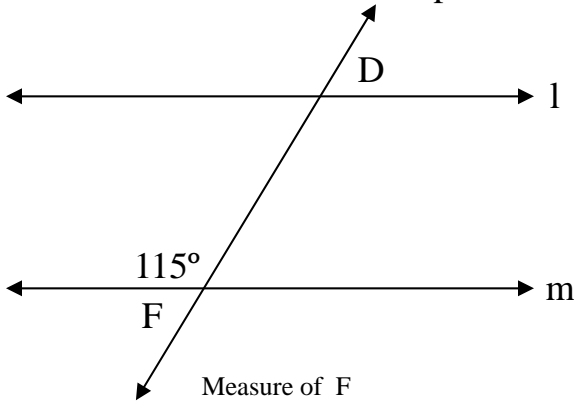
- Measure of A
- Measure of B
- Measure of C
- Measure of D
- Measure of E
- Measure of F
- Measure of G

2 Assume that line l and m are parallel.



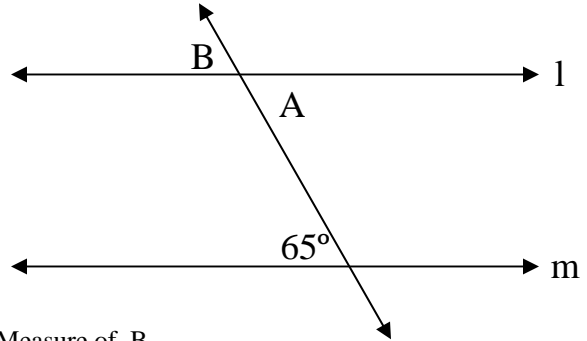
- Measure of A
- Measure of B
- Measure of C
- Measure of D
- Measure of E
- Measure of F
- Measure of G

3 Assume that line l and m are parallel.



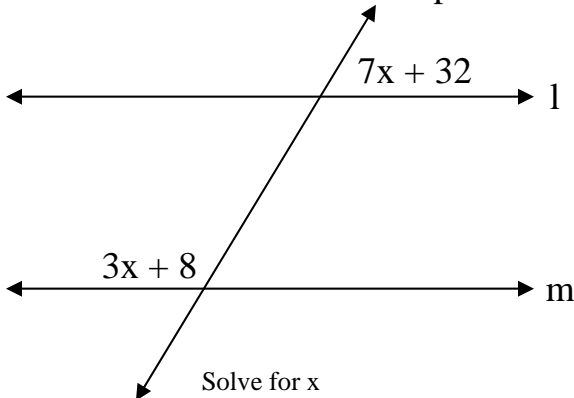
- Measure of F
- Measure of D

4 Assume that line l and m are parallel.



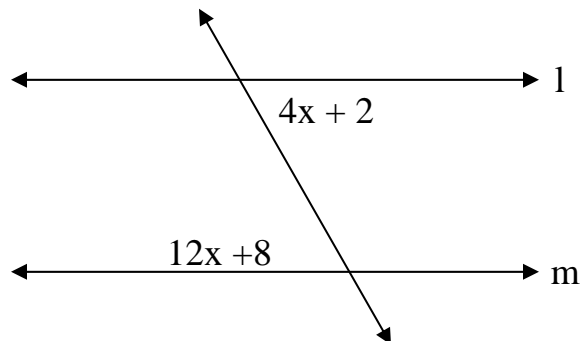
- Measure of B
- Measure of A

5 Assume that line l and m are parallel.



Solve for x

6 Assume that line l and m are parallel.



Solve for x