

Geometry

Unit 3 Proving Theorems B

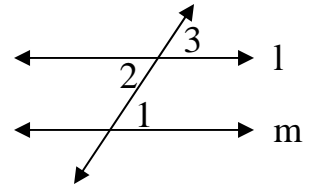
Name:

Date:

Period:

1. Given: $l \parallel m$

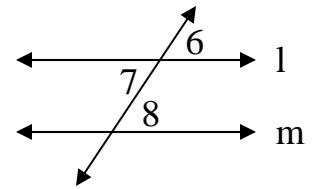
Prove: $\angle 1 \cong \angle 2$



Statement	Reason

2. Given: $l \parallel m$

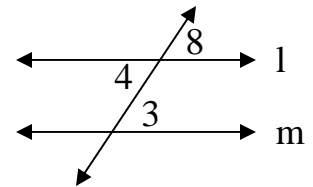
Prove: $\angle 7 \cong \angle 8$



Statement	Reason

3. Given: $l \parallel m$

Prove: $\angle 4 \cong \angle 3$



Statement	Reason