



# Geometry

Unit 1 Constructions Practice



Name:

Date:


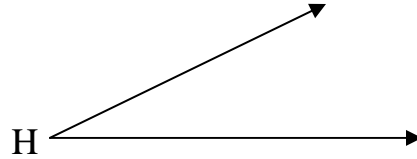
Period: Summer

Directions: Using your compass and straight-edge, draw the following constructions.


1. Given segment  $KL$ , construct segment  $MN$  congruent to segment  $KL$  on ray  $p$ .



2. Given angle H, construct angle L congruent to angle H on ray n.



3. Bisect segment  $JK$



4. Bisect angle  $ASB$

