




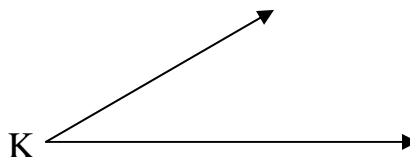
Chapter 1: Constructions Practice 1

Directions: Using your compass and straight-edge, draw the following constructions.


1. Given segment EF, construct segment GH congruent to segment EF on ray n.



2. Given angle K, construct angle L congruent to angle K on ray m.



3. Bisect segment YZ



4. Bisect angle RST

